




Graphing vs substitution	
<p>1</p> $y = 2x + 6$ $y = -2x - 2$ 	<p>My answer: _____</p> <p>My partner's answer: _____</p> <p>If they both agree on if the lines intersect and what your partner's work looks like, you're ready.</p>
<p>2</p> <p>My answer: _____</p> <p>My partner's answer: _____</p> <p>If they both agree on if the lines intersect and what your partner's work looks like, you're ready.</p>	$5x - 3y = -9$ $2x - 6y = 24$
<p>3</p> $2x - 3y = -12$ $x + y = 9$ 	<p>My answer: _____</p> <p>My partner's answer: _____</p> <p>If they both agree on if the lines intersect and what your partner's work looks like, you're ready.</p>
<p>4</p> <p>My answer: _____</p> <p>My partner's answer: _____</p> <p>If they both agree on if the lines intersect and what your partner's work looks like, you're ready.</p>	$x = 2y + 12$ $x = -2$
<p>5</p> $y = 2x + 4$ $5x - 2y = 12$ 	<p>My answer: _____</p> <p>My partner's answer: _____</p> <p>If they both agree on if the lines intersect and what your partner's work looks like, you're ready.</p>