








Magnets and springs

Name: _____

Read the guide whether each will be attracted to a magnet, and write a 'Y' or 'N' in the Circle column. Then try the experiment the next morning with object made for a magnet. Is it attracted? Write 'Y' or 'N' in the Result column. If you want to test more objects, continue this grid on the back of this sheet of paper.

Object	Circle	Result
 1-cent coin		
 20-cent coin		
 Pencil		
 Cup		
 Noodle		
 Spoon		
 Screwdriver		