


5's


3

4


5



3





4



5

Directions: Draw each set in different colors. Count each set. Write the base ten blocks. Write the number name for each block.



3

