

Name : \_\_\_\_\_

Score : \_\_\_\_\_

Teacher : \_\_\_\_\_

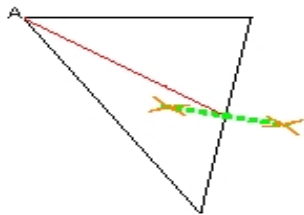
Date : \_\_\_\_\_

---

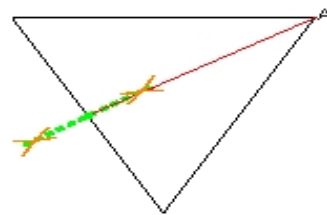
### Medians of Triangles Constructions

For each triangle, construct the median from vertex A.

1)

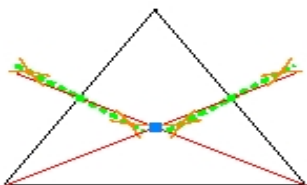


2)



Locate the centroid of each triangle.

3)



4)

