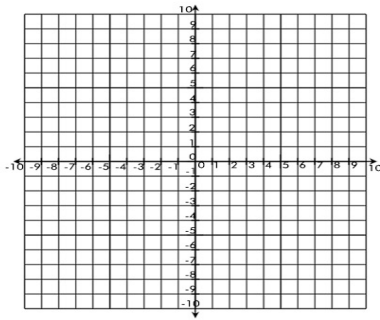


Name: _____


Date: _____

Linear Equations

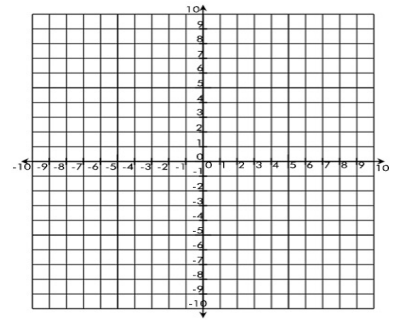
Graph each system and identify its solution



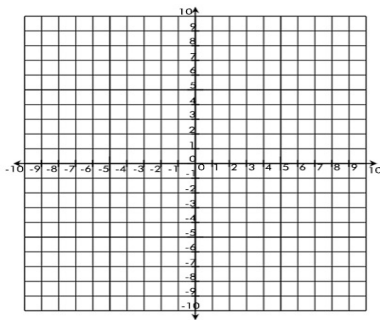
1) $7f - 10 = 3f + 3l$



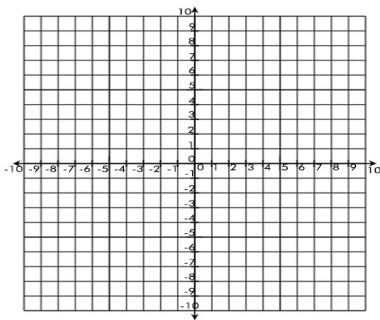
2) $6W - 4 = 2w + 4$



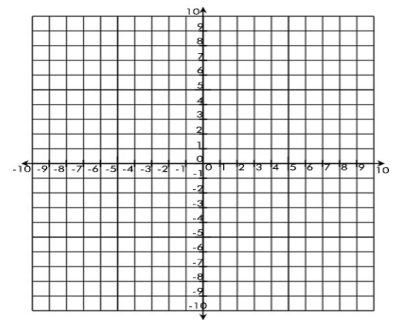
3) $3x + 4 = 2x + 8$



4) $2x + 5 = 5x - 4$



5) $12k + 15 = 25 + 2k$



6) $x + 7 = 4x + 4$