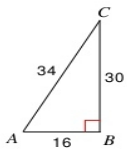


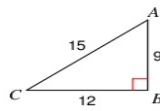
Finding Trigonometric Ratios

Find the value of each trigonometric ratio to the nearest ten-thousandth.

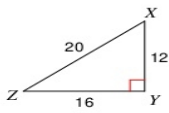
1)  $\tan A$



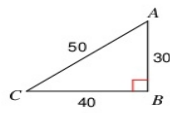
2)  $\cos C$



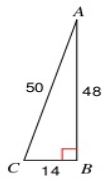
3)  $\sin Z$



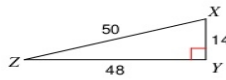
4)  $\sin C$



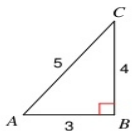
5)  $\sin C$



6)  $\sin Z$



7)  $\cos A$



8)  $\cos X$

