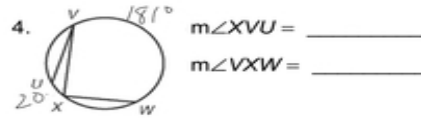
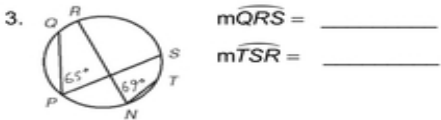
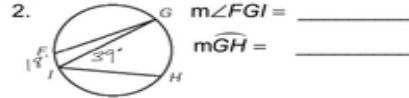
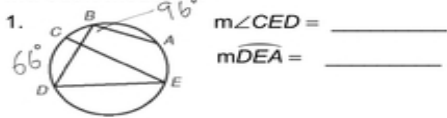


**LESSON** **Practice B**  
**11-4** **Inscribed Angles**

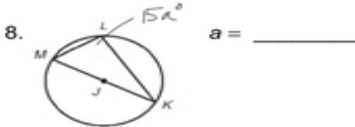
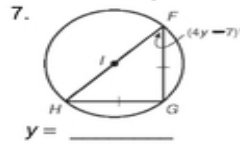
Find each measure.



5. A circular radar screen in an air traffic control tower shows these flight paths. Find  $m\angle LNK$ .



Find each value.



Find the angle measures of each inscribed quadrilateral.

