


Learning about Thirds

Look at the shape. It has 3 equal parts. Each part is $\frac{1}{3}$ or one-third.




$\frac{1}{3}$ ← part colored
 $\frac{3}{3}$ ← equal parts



Write the fraction $\frac{1}{3}$ on each part.


1.



2.



3.

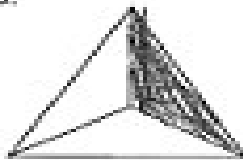


4.




Color $\frac{1}{3}$ of each shape.

5.



6.




7.




8.




9.



10.



11.



12.

