





Equivalent Fractions On A Number Line

Name: _____ Date: _____

Directions: For each problem, place the fraction on the number line next to 0. Then, decide if the two fractions given are equivalent. Fill in each blank with "equivalent" or "not equivalent."

1. $\frac{1}{2}$ 
 $\frac{2}{4}$ 

The fractions one-half and two-fourths are _____.

2. $\frac{3}{4}$ 
 $\frac{3}{8}$ 

The fractions three-fourths and three-eighths are _____.

3. $\frac{1}{2}$ 
 $\frac{2}{5}$ 

The fractions one-half and two-fifths are _____.

4. $\frac{2}{3}$ 
 $\frac{4}{6}$ 

The fractions two-thirds and four-sixths are _____.