

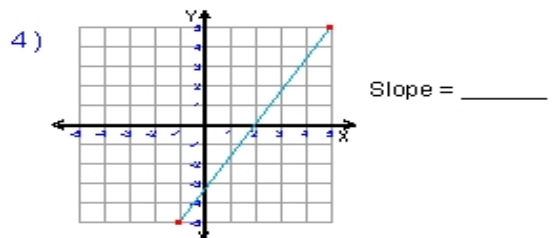
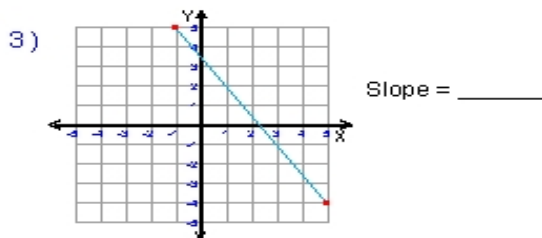
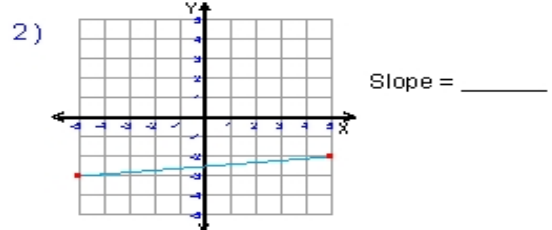
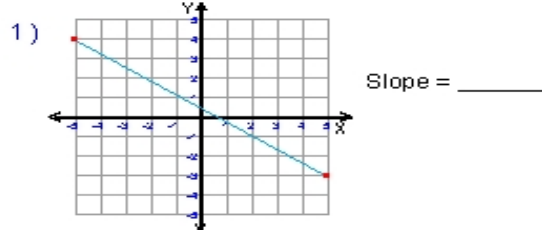
Name : \_\_\_\_\_

Score : \_\_\_\_\_

Teacher : \_\_\_\_\_

Date : \_\_\_\_\_

**What is the slope of each line ?**



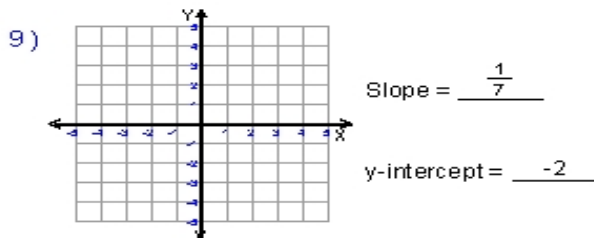
5)  $y = \frac{1}{2}x - 3$  Slope = \_\_\_\_\_

6)  $y = -\frac{2}{7}x + 1$  Slope = \_\_\_\_\_

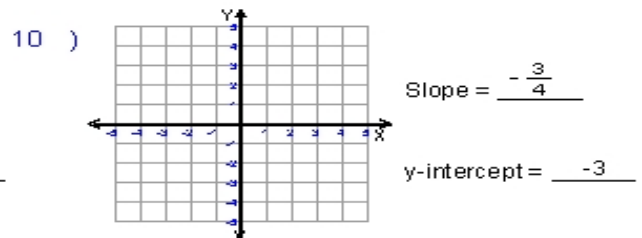
7)  $y = 10x + 2$  Slope = \_\_\_\_\_

8)  $y = -3x$  Slope = \_\_\_\_\_

**Write the slope-intercept form and plot the equation of each line given the slope and y-intercept.**



Equation : \_\_\_\_\_



Equation : \_\_\_\_\_