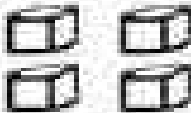






Counting On With Blocks

Name _____

Directions: Cut out the numbers at the bottom of the page. "Count on" to solve each addition problem. Use the numbers in the correct place.

10	+		=	<input type="text"/>
10	+		=	<input type="text"/>
10	+		=	<input type="text"/>
10	+		=	<input type="text"/>
10	+		=	<input type="text"/>

K-CC.3.K-OA.1 & K-MF.2 Teacher Time

16	14	15	12	13
-----------	-----------	-----------	-----------	-----------