

Volume – Homework #1

1) Calculate the area of each.

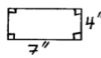
a)



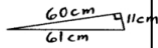
b)



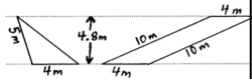
c)



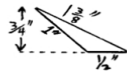
d)



e)



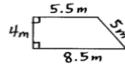
f)



g)



h)



i)



j)

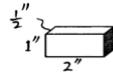


2) Calculate the volume.

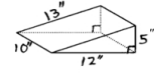
a)



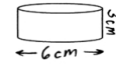
b)



c)



d)



e)

