

Name: \_\_\_\_\_ Subject: Year 3 Numeracy  
 Date: \_\_\_\_\_ Unit: 3D shapes

Name each of these 3D shapes below:



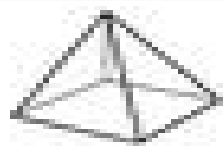
\_\_\_\_\_



\_\_\_\_\_



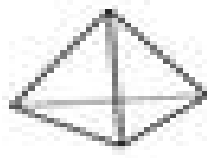
\_\_\_\_\_




\_\_\_\_\_




\_\_\_\_\_



\_\_\_\_\_



\_\_\_\_\_



\_\_\_\_\_