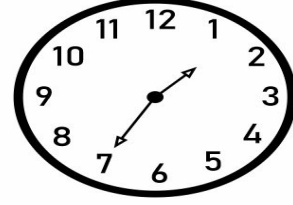

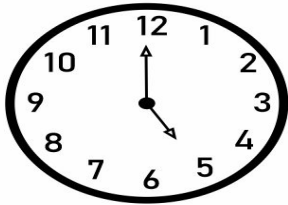


Name \_\_\_\_\_

Date \_\_\_\_\_

# MORNING MATH

Write the time below each clock!



Find the difference!

$$\begin{array}{r} 34 \\ - 23 \\ \hline \end{array} \quad \begin{array}{r} 45 \\ - 21 \\ \hline \end{array} \quad \begin{array}{r} 57 \\ - 34 \\ \hline \end{array}$$

Find the sum!

$$\begin{array}{r} 23 \\ + 3 \\ \hline \end{array} \quad \begin{array}{r} 56 \\ + 24 \\ \hline \end{array} \quad \begin{array}{r} 67 \\ + 32 \\ \hline \end{array}$$

Solve the word problem below!

You have collected 13 crickets. How many more crickets do you need to collect to have 30 crickets?  
(show your work!)

Find the missing number!

$$\underline{\quad\quad} + 70 = 160$$

$$\underline{\quad\quad} + 40 = 120$$

$$30 + \underline{\quad\quad} = 80$$

$$\underline{\quad\quad} + 20 = 90$$