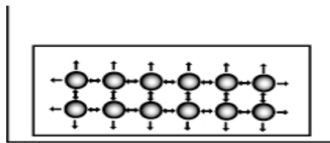


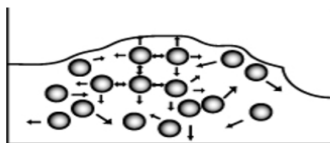
Name: _____

Changes of state

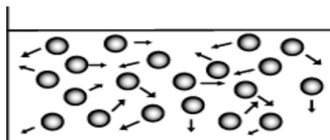
The diagrams below show *water* particles at 5 different temperatures. Can you guess the temperature for each diagram? Give reasons for your answer using the position and movement of the particles as evidence.



Temperature	_____ °C
Reason:	_____



Temperature	_____ °C
Reason:	_____



Temperature	_____ °C
Reason:	_____

