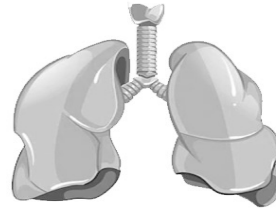
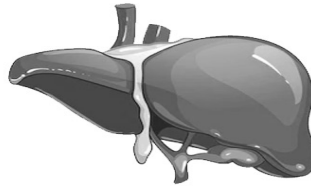
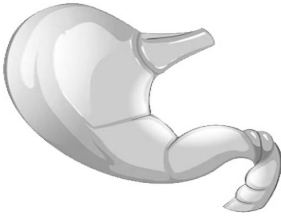
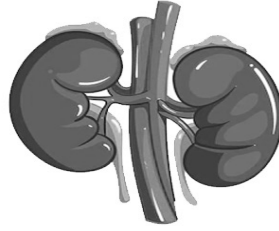


Name: \_\_\_\_\_

Date: \_\_\_\_\_

## Organization Cell Tissue Organ Worksheet



Choose the name of the system that the parts of the body belong to:

1. hormones, testicles, adrenal gland
2. hamstring, biceps, triceps
3. lungs, trachea, nose
4. mouth, stomach, intestines,
5. brain, spinal cord, nerves
6. kidneys, bladder, urethra
7. uterus, fallopian tubes, ovary
8. heart, blood vessels, blood