

Score

6

02-01-03-007-s

Name: _____

Subject: Year 2 Numeracy

Date: _____

Unit: 3-D shapes

Name the following 3-D shapes:


1)



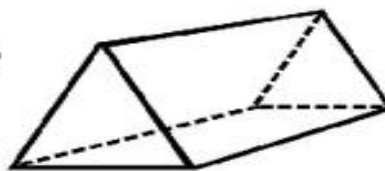
2)



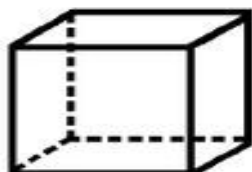
3)



4)



5)



6)

