


2) Transformations in the Plane

Exercise 1


1) Translation

Draw the image of the figure using the transformation given.


a) $(x, y) \rightarrow (x+2, y+1)$




b) $(x, y) \rightarrow (x-1, y+2)$




c) $(x, y) \rightarrow (x, y-1)$



d) $(x, y) \rightarrow (x+5, y+2)$



e) $(x, y) \rightarrow (x+1, y-4)$



f) $(x+2, y+3)$

