







Name \_\_\_\_\_

Date \_\_\_\_\_

# Before & After Math

Fill in the blanks with the missing numbers.

|                                                                                          |                                                                                           |                                                                                             |
|------------------------------------------------------------------------------------------|-------------------------------------------------------------------------------------------|---------------------------------------------------------------------------------------------|
| <br>5   | <br>19   | <br>8    |
| <br>12  | <br>15   | <br>4    |
| <br>11 | <br>17 | <br>13  |
| <br>2 | <br>6  | <br>16 |