



Name _____


Mixed Numbers


Identify and name mixed numbers and improper fractions.


Write the mixed number and the improper fraction for each picture.

| | | |
|---|--------------------------------|------------------------------------|
|  | Mixed Number $1\frac{1}{3}$ | Improper Fraction $\frac{4}{3}$ |
|---|--------------------------------|------------------------------------|

| | | |
|--|--------------|-------------------|
| 1.  | Mixed Number | Improper Fraction |
|--|--------------|-------------------|

| | | |
|---|--------------|-------------------|
| 2.  | Mixed Number | Improper Fraction |
|---|--------------|-------------------|

| | | |
|--|--------------|-------------------|
| 3.  | Mixed Number | Improper Fraction |
|--|--------------|-------------------|

| | | |
|--|--------------|-------------------|
| 4.  | Mixed Number | Improper Fraction |
|--|--------------|-------------------|