

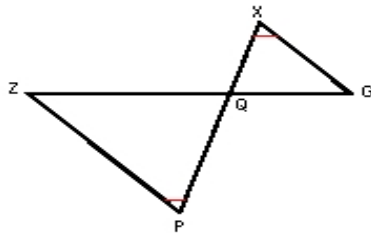
Name : \_\_\_\_\_ Score : \_\_\_\_\_

Teacher : \_\_\_\_\_ Date : \_\_\_\_\_

### Similar Right Triangles

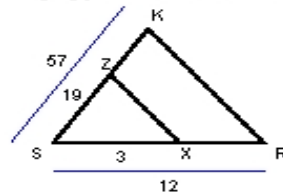
State if each triangle pair is similar. If so, state the similarity type and name the similar triangle.

1)



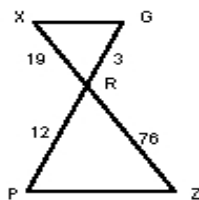
$\triangle GQX \sim$  \_\_\_\_\_

2)



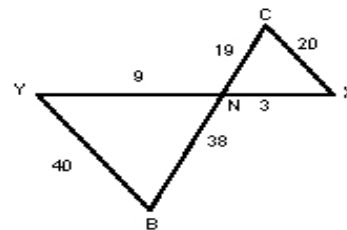
$\triangle RSK \sim$  \_\_\_\_\_

3)



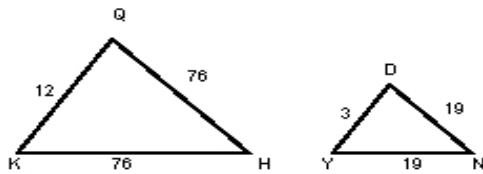
$\triangle GRX \sim$  \_\_\_\_\_

4)



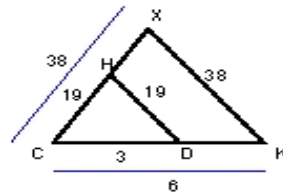
$\triangle XNC \sim$  \_\_\_\_\_

5)



$\triangle QKH \sim$  \_\_\_\_\_

6)



$\triangle KCX \sim$  \_\_\_\_\_

