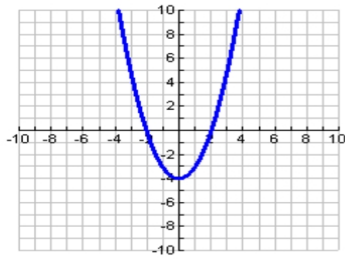


Math 1 Unit 1
WS

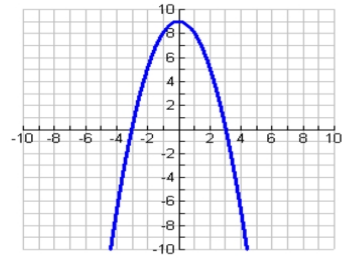
Name: _____
Date: _____

List any maximum or minimum values, intervals of increase, intervals of decrease, and zeros for each function. Describe the end behavior for each function.

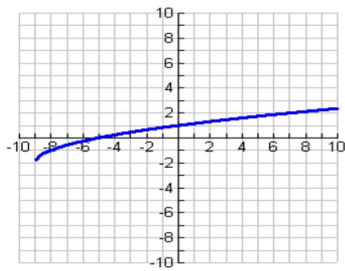
1.



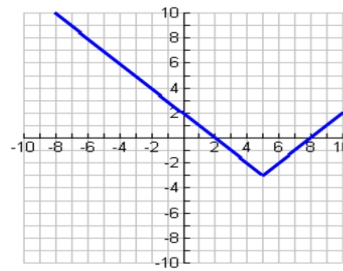
2.



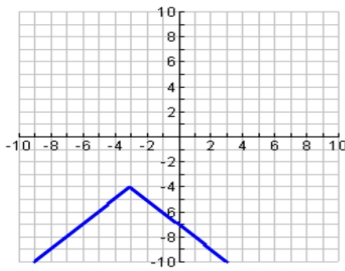
3.



4.



5.



6.

