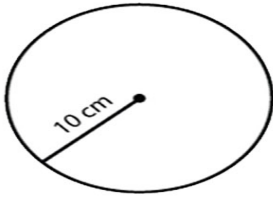


Name: \_\_\_\_\_

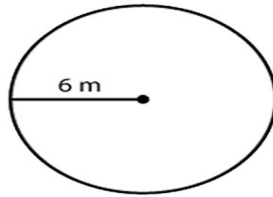
Score: \_\_\_\_\_ Date: \_\_\_\_\_

# Area of a Circle

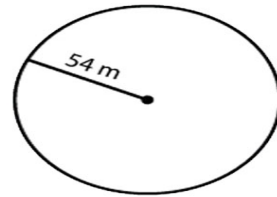
Find the area of each circle



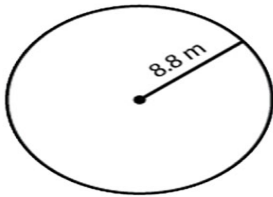
Area = \_\_\_\_\_



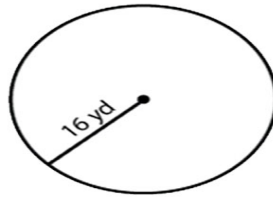
Area = \_\_\_\_\_



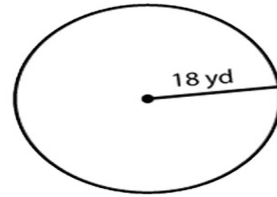
Area = \_\_\_\_\_



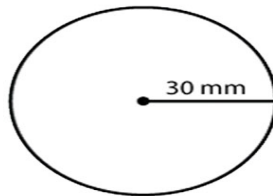
Area = \_\_\_\_\_



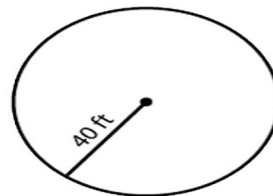
Area = \_\_\_\_\_



Area = \_\_\_\_\_



Area = \_\_\_\_\_



Area = \_\_\_\_\_