

Name _____

Weather
Reading a weather map

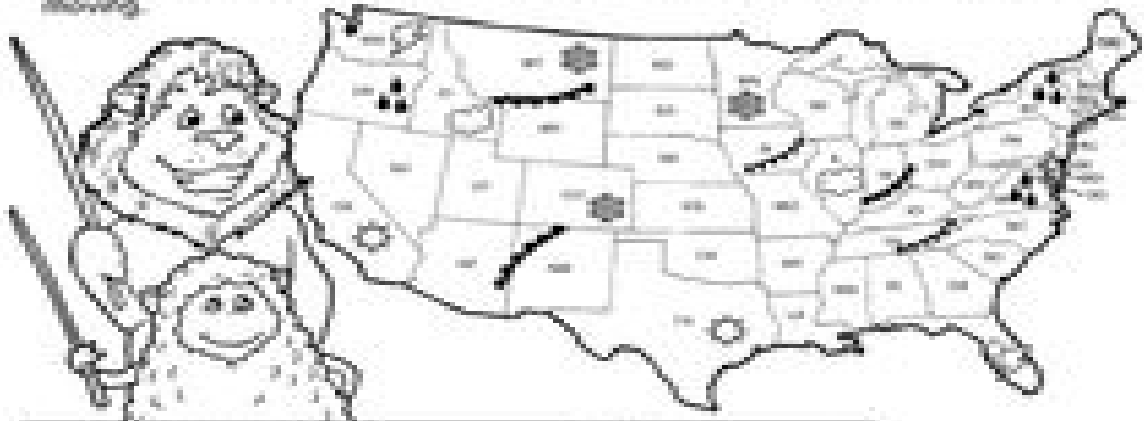
Weather Watch

Study the weather map and key.








Read each weather forecast in the chart.

Then circle the name of the matching state.

Remember that the  and  front symbols point in the direction that the front is moving.



Forecast	State		
1. Gray, cloudy skies	CA California	IL Illinois	UT Utah
2. Thunder and lightning	FL Florida	GA Georgia	VA Virginia
3. Heavy rainfall	WY Wyoming	ID Idaho	NY New York
4. Warm air moving through	WA Washington	NM New Mexico	CO Colorado
5. Heavy snowfall	MN Minnesota	OR Oregon	WI Wisconsin
6. Sunny skies	AL Alabama	OK Oklahoma	TX Texas
7. Warm air on the way	GA Georgia	WY Wyoming	NV Nevada
8. Cold air moving out	IN Indiana	DE Delaware	TN Tennessee

Key	
	sunny
	rainy
	stormy
	cloudy
	snowy
	cold front
	warm front

Some Bear likes the map. Write a weather forecast for Arizona (AZ), California (CA), and Virginia (VA).