

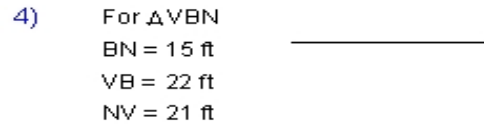
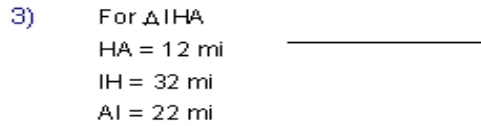
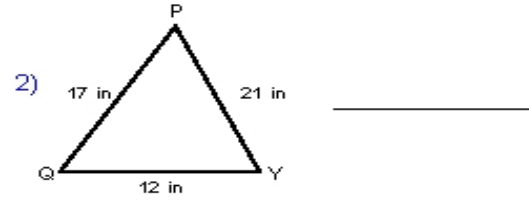
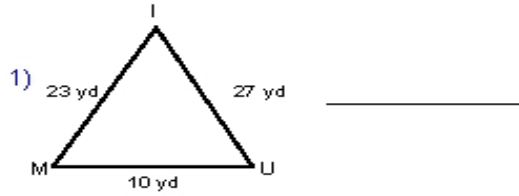
Name : \_\_\_\_\_ Score : \_\_\_\_\_

Teacher : \_\_\_\_\_ Date : \_\_\_\_\_

---

### Triangle Inequality of Angles

Order each triangle's angles from largest to smallest.



Name the largest and smallest angle for each triangle.

