


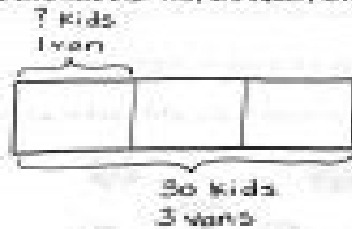
3. Camille buys a sheet of stamps that measures 15 centimeters long. Each stamp is 3 centimeters long. How many stamps does Camille buy? Draw and label a tape diagram to solve.



$$15 \div 3 = 5$$

Camille buys 5 stamps.


4. Thirty third graders go on a field trip. They are equally divided into 3 vans. How many students are in each van?



$$30 \div 3 = 10$$

There are 10 students in each van.

5. Some friends spend \$24 altogether on frozen yogurt. Each person pays \$3. How many people buy frozen yogurt?



$$\$24 \div \$3 = 8$$

8 friends buy frozen yogurt.