


1.  $2x + 3y = 6$        $3x + 2y = 6$

---

---

---

---




2.  $4x - 2y = 8$        $2x + 3y = 10$

---

---

---

---




3.  $5x + 2y = 10$        $3x - 4y = 12$

---

---

---

---



4.  $x + 2y = 4$        $2x + 3y = 6$

---

---

---

---



5.  $3x + 4y = 12$        $2x + 3y = 6$

---

---

---

---