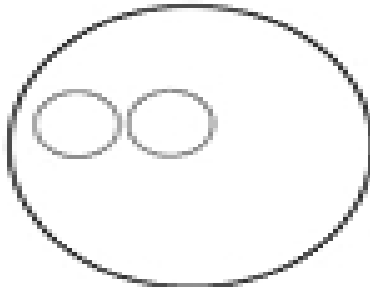
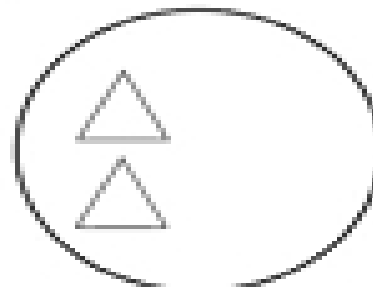


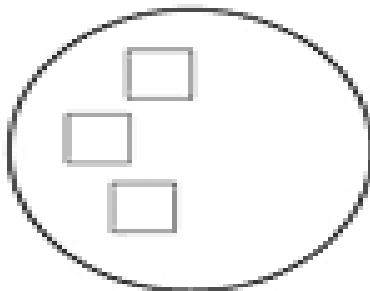
# Adding to sets



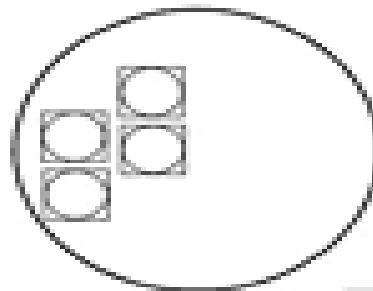
Draw 2 more.  
Count how many  
in the set.



Draw 1 more.  
Count how many  
in the set.



Draw 3 more.  
Count how many  
in the set.



Draw 4 more.  
Count how many  
in the set.

Draw a set of 6 triangles.

