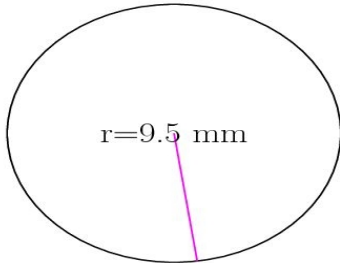
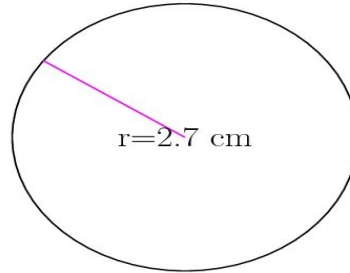


## Area and Circumference of Circles (A)

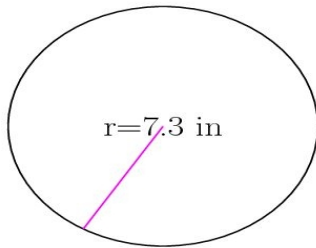
Calculate the area and circumference of each circle.



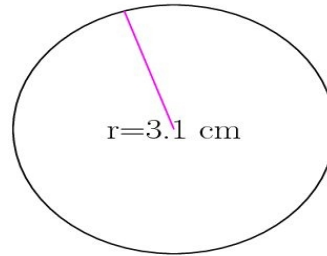
circumference = \_\_\_\_\_  
area = \_\_\_\_\_



circumference = \_\_\_\_\_  
area = \_\_\_\_\_



circumference = \_\_\_\_\_  
area = \_\_\_\_\_



circumference = \_\_\_\_\_  
area = \_\_\_\_\_