




Name: _____

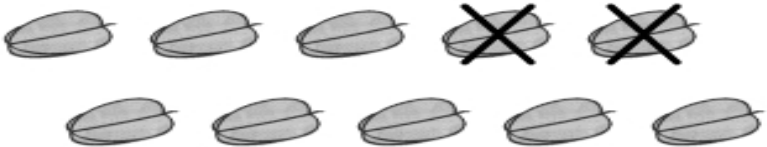
Subtracting up to 10


Subtract and write the correct number in the box.

	$\begin{array}{r} 8 \\ - 7 \\ \hline \dots \end{array}$
--	---

	$\begin{array}{r} 9 \\ - 4 \\ \hline \dots \end{array}$
--	---

	$\begin{array}{r} 9 \\ - 5 \\ \hline \dots \end{array}$
---	---

	$\begin{array}{r} 10 \\ - 2 \\ \hline \dots \end{array}$
--	--

	$\begin{array}{r} 10 \\ - 3 \\ \hline \dots \end{array}$
--	--