


Make a Path




Name _____ Date _____




Desert Trail

Follow the path of numbers on each trail. How do the numbers fit a pattern? Write numbers on the lines to complete each pattern. Then write the "pattern rule." The first one is done for you.

1.    3 4 5 6 7 8 9 10 11 12 13
Rule: $+1$

2.  4 6 10 12 16 20
Rule: _____

3.    3 6 12 15 21
Rule: _____

4.    5 10 20 25 35
Rule: _____ 