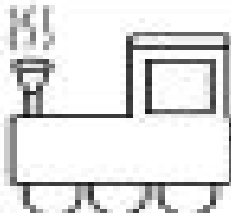
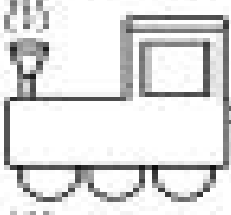

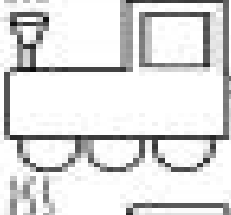
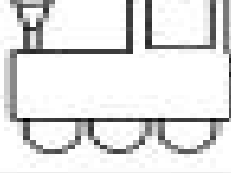


Name _____ Date _____

Write each missing number.

	<table border="1" style="width: 100%; border-collapse: collapse;"><tr><td style="text-align: center;">1</td><td></td><td></td><td></td><td></td><td></td><td></td><td></td><td style="text-align: center;">10</td></tr></table>	1								10
1								10		
	<table border="1" style="width: 100%; border-collapse: collapse;"><tr><td style="text-align: center;">11</td><td></td><td></td><td></td><td></td><td></td><td></td><td></td><td style="text-align: center;">20</td></tr></table>	11								20
11								20		
	<table border="1" style="width: 100%; border-collapse: collapse;"><tr><td style="text-align: center;">21</td><td></td><td></td><td></td><td></td><td></td><td></td><td></td><td style="text-align: center;">30</td></tr></table>	21								30
21								30		
	<table border="1" style="width: 100%; border-collapse: collapse;"><tr><td style="text-align: center;">31</td><td></td><td></td><td></td><td></td><td></td><td></td><td></td><td style="text-align: center;">40</td></tr></table>	31								40
31								40		
	<table border="1" style="width: 100%; border-collapse: collapse;"><tr><td style="text-align: center;">41</td><td></td><td></td><td></td><td></td><td></td><td></td><td></td><td style="text-align: center;">50</td></tr></table>	41								50
41								50		