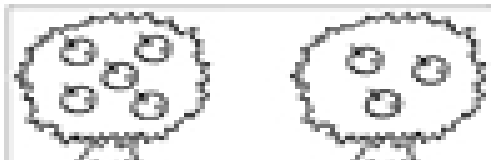



More than or less than?




Fill in the apples and numbers that make each sentence true.



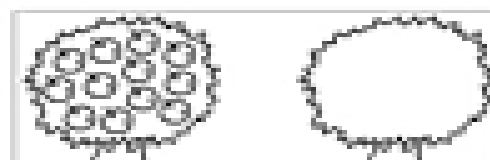
is more than



is more than



is more than



is more than

Fill in the flowers and numbers that make each sentence true.



is less than



is less than



is less than



is less than