





Five Minute Mozart © “All you need to know in five minutes or less”

Identify the note and the amount of beats



ANSWER KEY

Note	Note Name	Number of Beats
	Quarter Note	1 beat
	Half Note	2 beats
	Whole Note	4 beats

Which of the following measures are wrong?



This measure is wrong because 2 quarter notes equal only 2 beats. The time signature indicates that there should be 4 beats in every measure.



This measure is wrong because 3 quarter notes plus 1 half note equals 5 beats. The time signature only allows 4 beats per measure