




Triangles

Look at these different triangles.



Equilateral
all sides equal
all angles equal









Isosceles
two sides equal



Scalene
all sides different



Right-angled
one of the angles is
a right angle



List the triangles that are:

Equilateral _____

Isosceles _____

Scalene _____

Right-angled _____