


Name _____

Date _____

METHOD OF HEAT TRANSFER

Identify the method of heat transfer that takes place in each illustration. Some illustration may show more than one form of heat transfer.



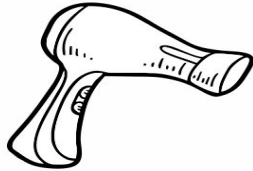
.....



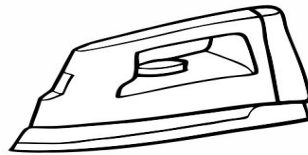
.....



.....



.....



.....




.....



.....



.....



.....