


Name _____

Commutative Property of Multiplication

Write an equation that represents the array to show the commutative property of multiplication.

Example:



4×6


=



6×4

=

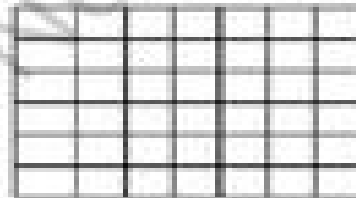
1.




\times

=

\times




2.



\times

=



\times