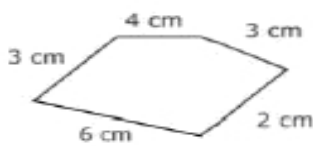


Name _____

Date _____

Unique Area and Perimeter

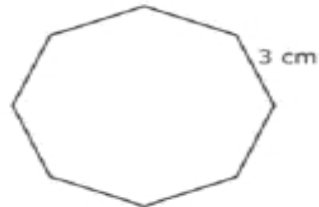
Find the area (A) and/or perimeter (P) of given figures.



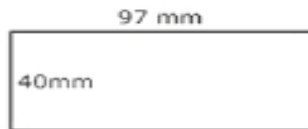
1. P = _____



2. A = _____
P = _____



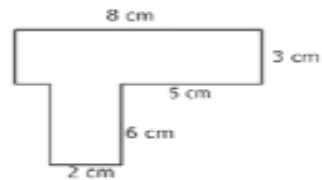
3. P = _____



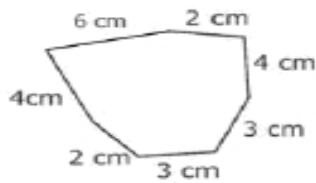
4. A = _____
P = _____



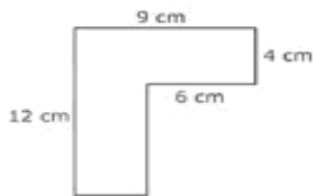
5. A = _____
P = _____



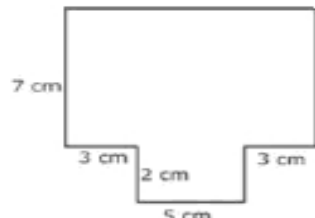
6. A = _____
P = _____



7. P = _____



8. A = _____
P = _____



9. A = _____
P = _____