

School  
Logo  
Here

**Mathematics**  
**WORKSHEET**  
**Circumference of Circles**

Worksheet: ● 2 3 4 5 6 7 8 9 10

Name: \_\_\_\_\_

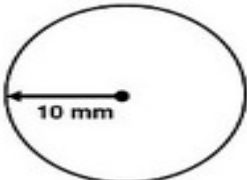
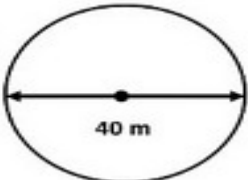
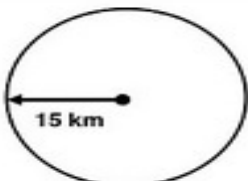
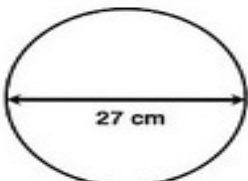
Student No.: \_\_\_\_\_

Date: \_\_\_\_\_

Year 6/ \_\_\_\_\_

C I R C L E S

Find the circumference of each figure. [Take  $\pi = 3.14$  ]

<p>1.</p>  <p>10 mm</p>	<p>2.</p>  <p>40 m</p>
<p>3.</p>  <p>15 km</p>	<p>4.</p>  <p>27 cm</p>