

Practice D



Find the number of degrees in each unmarked angle.

Remember: The total number of degrees of the interior angles in a triangle equals 180.

1.




$\angle a =$ _____

2.



$\angle c =$ _____

3.




$\angle a =$ _____

4.



$\angle a =$ _____

5.




$\angle a =$ _____

6.



$\angle a =$ _____

7.



$\angle a =$ _____

8.



$\angle a =$ _____