













Write the number sentences. Solve the problems.

<p>4  set at their desks.</p> <p>3  set at their desks.</p> <p>_____ + _____ = _____</p>	<p>6  </p> <p>Add 2</p> <p>How many pencils?</p> <p>_____ + _____ = _____</p>
<p>2  for the teacher.</p> <p>3  for the children.</p> <p>_____ + _____ = _____</p>	<p>3 </p> <p>Add 7</p> <p></p> <p>How many rulers?</p> <p>_____ + _____ = _____</p>
<p>5  at lunch.</p> <p>4  were eaten.</p> <p>_____ + _____ = _____</p>	<p>9  on the desk.</p> <p>6  put on homework.</p> <p>How many stars were left?</p> <p>_____ + _____ = _____</p>