

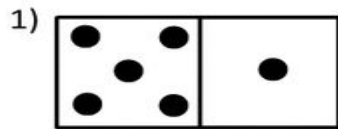
Name \_\_\_\_\_

Date \_\_\_\_\_

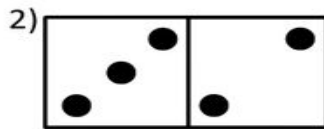


## DOMINO ADDITION SHEET 4

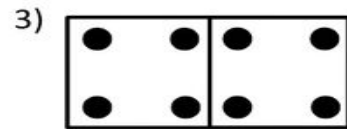
Count the number of dots on each domino and fill in the total.



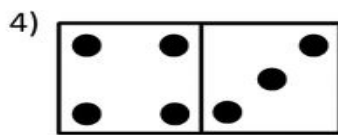
\_\_\_ + \_\_\_ = \_\_\_



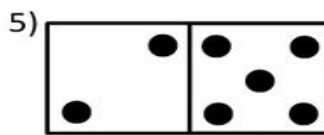
\_\_\_ + \_\_\_ = \_\_\_




\_\_\_ + \_\_\_ = \_\_\_




\_\_\_ + \_\_\_ = \_\_\_




\_\_\_ + \_\_\_ = \_\_\_




\_\_\_ + \_\_\_ = \_\_\_




\_\_\_ + \_\_\_ = \_\_\_




\_\_\_ + \_\_\_ = \_\_\_




\_\_\_ + \_\_\_ = \_\_\_



\_\_\_ + \_\_\_ = \_\_\_



\_\_\_ + \_\_\_ = \_\_\_



\_\_\_ + \_\_\_ = \_\_\_

Shade the dominoes which have a total of 10.



Free Math Sheets, Math Games and Math Help

[MATH-SALAMANDERS.COM](http://MATH-SALAMANDERS.COM)