


## Habitats

Name: \_\_\_\_\_

Write these food chains in the correct order. Then write the name of one producer, one predator and one prey in each food chain.

1




Wheat      Sun      Mouse      Owl

\_\_\_\_\_ → \_\_\_\_\_ → \_\_\_\_\_

Producer      Prey      Predator

2




Zebra      Lion      Sun      Grass

\_\_\_\_\_ → \_\_\_\_\_ → \_\_\_\_\_

Producer      Prey      Predator

3



Dolphin      Seaweed      Eel      Sun

\_\_\_\_\_ → \_\_\_\_\_ → \_\_\_\_\_

Producer      Prey      Predator