


Name _____

Date _____


Lines of Symmetry

Cut out each shape + fold them to find the lines of symmetry and draw lines using a ruler.


Underneath each shape write how many lines of symmetry it has.



... lines of symmetry




... lines of symmetry




... lines of symmetry



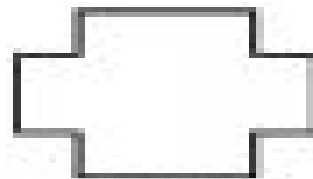
... lines of symmetry




... lines of symmetry




... lines of symmetry




... lines of symmetry



... lines of symmetry



... lines of symmetry



... lines of symmetry