





Name: _____



12 o'clock




half past 12




quarter past 2





15 past 12




quarter past 12



15 past 1






15 past 1




30 past 2

15 past 2



15 past 2



3 o'clock