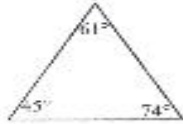


Name: _____
Period: _____

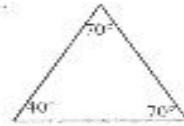
Applied Math 3
Classifying Triangles

Classify each of the following triangles based on the information provided.

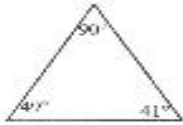
1.



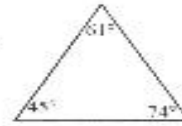
2.



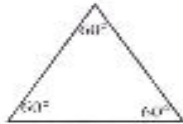
3.



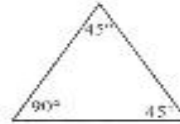
4.



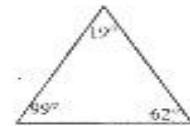
5.



6.



7.



8.

