

Name : \_\_\_\_\_

Score : \_\_\_\_\_

Teacher : \_\_\_\_\_

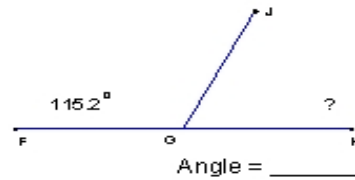
Date : \_\_\_\_\_

Find the missing angle measurement in each set of supplementary angles.

1)



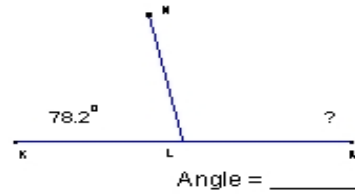
2)



3)



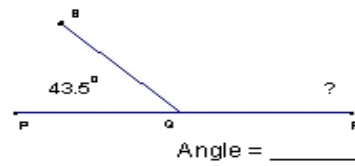
4)



5)



6)



7)



8)

