


Reading Analog Clocks (A)

Read each time and write it in the space under the clock.


1.



2.




3.



4.




5.



6.




7.




8.




9.



10.



11.



12.

