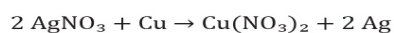


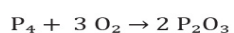
TYPES OF CHEMICAL REACTION ANSWER

Name: _____

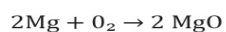
Date: _____




single displacement



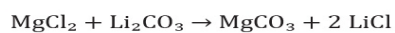
synthesis



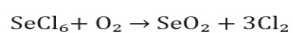
synthesis



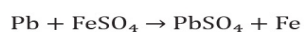
combustion



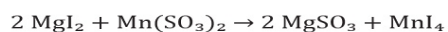
double displacement



single displacement



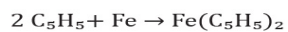
single displacement



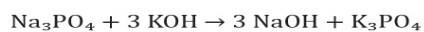
double displacement



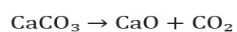
combustion



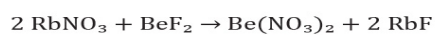
synthesis



double displacement



decomposition



double displacement