

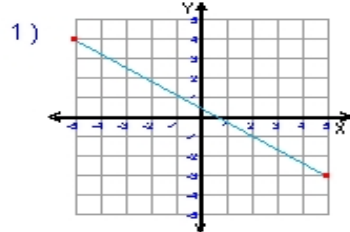
Name : _____

Score : _____

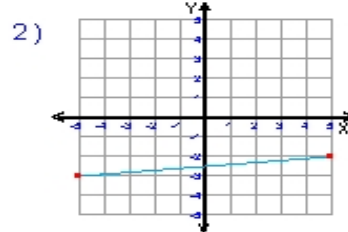
Teacher : _____

Date : _____

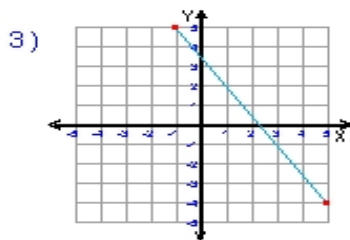
What is the slope of each line ?



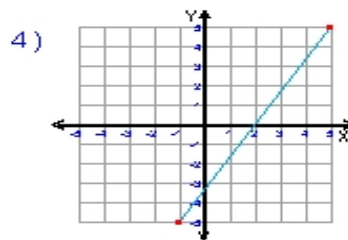
Slope = _____



Slope = _____



Slope = _____



Slope = _____

5) $y = \frac{1}{2}x - 3$

Slope = _____

6) $y = -\frac{2}{7}x + 1$

Slope = _____

7) $y = 10x + 2$

Slope = _____

8) $y = -3x$

